

Maths

To solve problems involving doubling and halving

In this lesson we will be finding double or half of a length

Do Now

Q1. How many cm are there in 1 metre?

10 cm

30 cm

100 cm

Q2. Select the object you think is taller than 1 metre.



mobile phone



chair



front door

Q3. Select the object that you think is shorter than 1 metre.

Select one (1) boxes



Fridge



plant



ladder

Task 1

Here is a table of numbers. You need to work out what half of them is, the first one is done for you.

Make sure that you use some manipulatives so you can prove it.

Whole	Half
14	7
16	
8	
20	
24	

Task 2

Here is a table of numbers. You need to work out what double is, the first one is done for you.

Make sure you use manipulatives so that you can prove it.

Half	Double
8	16
20	
14	
18	
21	

Task 3

Q1. Which equation is showing double?

4+3

4+5

4+4

Q2. Which image is showing half of 16



Option 1



Option 2

Q3. Which image is showing double 6?



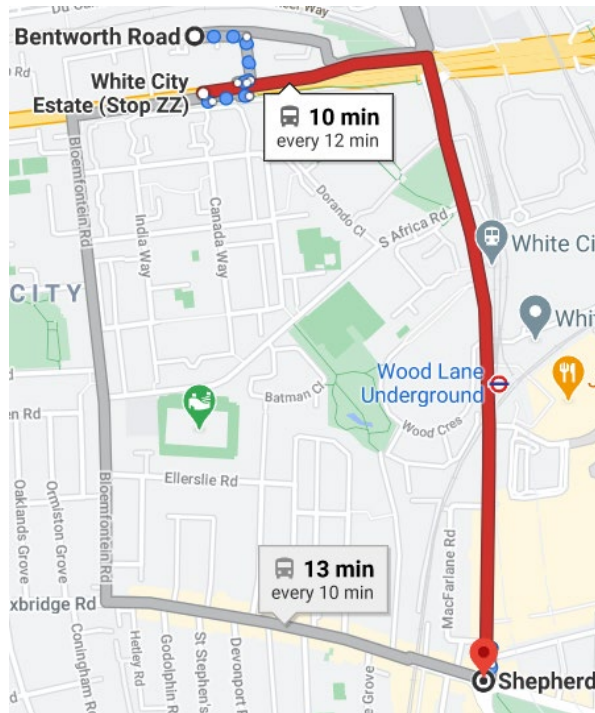
Option 1



Option 2

Writing

Today we are going to plan our own bus journey to Shepherds bush market from school.



Write some words and phrases describing what you might see on the way. Look at the video on DB primary for some ideas.



List what you would see on your journey.



List the different sounds you would hear along the journey.



List what you might feel along the way.



List the smells you may smell along the way.

Science



Herbivores

Animals that eat plants, fruits, vegetables and leaves are called **herbivores**. These animals cannot digest meat. Their teeth are strong and flat for grinding up plant matter. Some herbivores can also have sharp **incisors** which help to tear some plants.



Omnivores



Animals that regularly eat both meat and plants are called omnivores. They have a variety of teeth to eat different foods. Humans are omnivores. Take a look and feel of your own teeth: what do you notice?



Carnivores

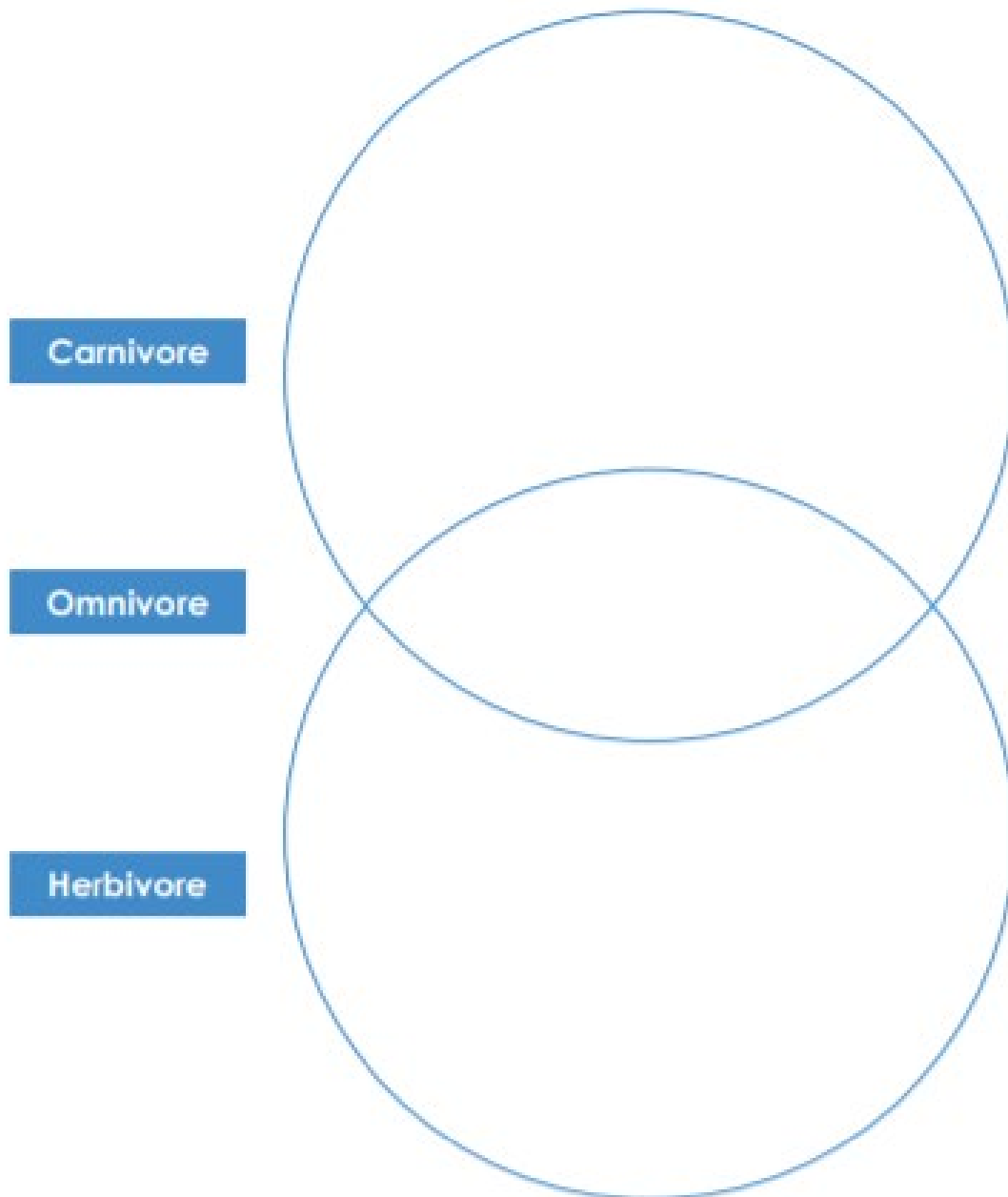
Animals that eat meat are called **carnivores**. They need sharp teeth to tear the flesh and meat from the animal they are eating. They usually have four canine teeth that are long and pointed with sharp edges. When they open and close their jaws, their teeth tear through the meat and flesh.





Carnivore, Herbivore or Omnivore?

Can you sort animals into this Venn diagram?




Bear	Giraffe	Rabbit
Lion	Horse	Shark
Human	Fox	Hippopotamus

a

Unscramble this sentence.

 must off get that. You




b

Use numbers 1-3 to order this short story. One is done for you.

Once upon a time, there was a shark.

The fish were happy and had a party!


This shark did not eat fish. 2



c

Tick the real words and cross the nonsense alien words.

laip	rain
taiw	seek
keep	jeex



d


Find the hidden words.

do	s	d	o	w	n
was	a	l	l	e	n
her	o	a	h	e	r
all	y	w	n	d	r
down	o	a	o	w	d
	e	s	p	t	o

e

Write the plural of this noun by adding the 's' suffix to show there is more than one.

jet _____




f

Oops Mr Whoops has made ONE mistake in his sentence.

Can you fix it?

That coat was in Canada on thursday.



Capital letters

Trace and write the letters.

